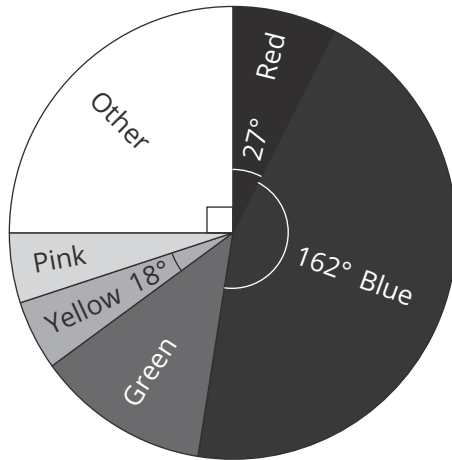


Pie Charts – Which Pie Chart? **Answers**

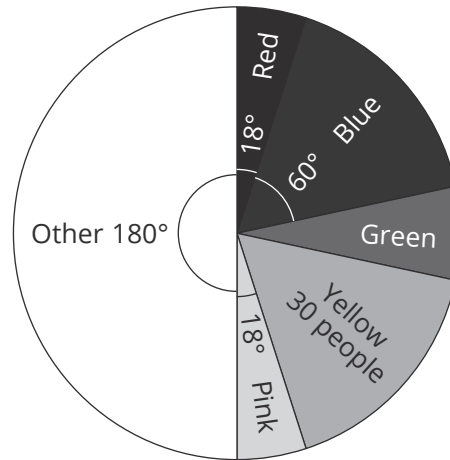
Three different groups, of varying sizes, were asked their favourite colour. The results for each group are shown in the pie charts below.

Cut out each of the 12 statements and match them with the correct pie chart.

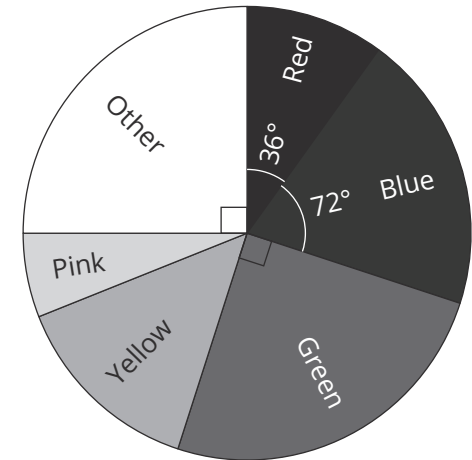
Group 1
40 People



Group 2
180 People



Group 3
500 People



18 people chose blue as their favourite colour.

90 people chose 'other'.

Half the people asked chose either 'other' or green as their favourite colour.

10 people chose 'other'.

The same amount of people chose yellow or blue as their favourite colour.

50 people chose red as their favourite colour.

2 people chose yellow as their favourite colour.

12 people chose green as their favourite colour.

100 people chose either pink or yellow as their favourite colour.

23 people chose either red, blue or yellow as their favourite colour.

9 people chose red as their favourite colour.

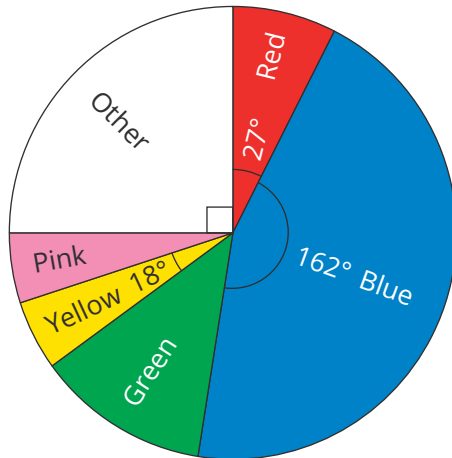
100 people chose blue as their favourite colour.

Pie Charts – Which Pie Chart?

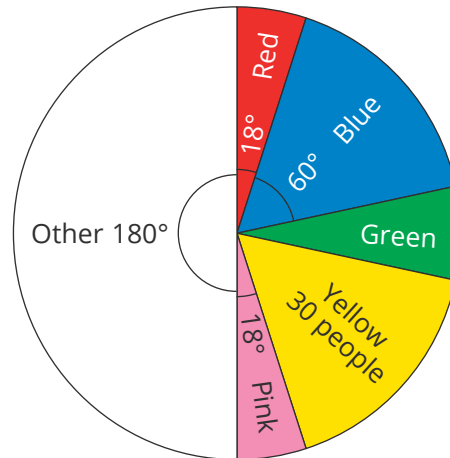
Three different groups, of varying sizes, were asked their favourite colour. The results for each group are shown in the pie charts below.

Cut out each of the 12 statements and match them with the correct pie chart.

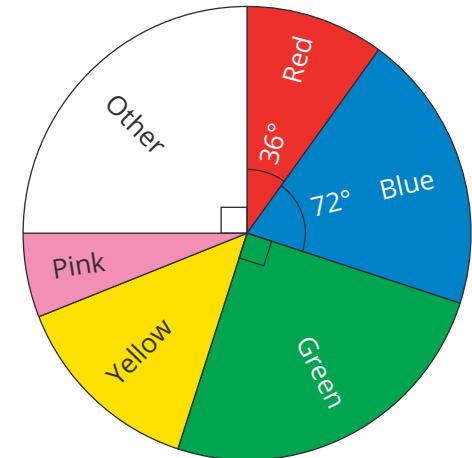
Group 1
40 People



Group 2
180 People



Group 3
500 People



90 people chose 'other'.

18 people chose blue as their favourite colour.

9 people chose red as their favourite colour.

100 people chose blue as their favourite colour.

100 people chose either pink or yellow as their favourite colour.

10 people chose 'other'.

2 people chose yellow as their favourite colour.

50 people chose red as their favourite colour.

The same amount of people chose yellow or blue as their favourite colour.

12 people chose green as their favourite colour.

23 people chose either red, blue or yellow as their favourite colour.

Half the people asked chose either 'other' or green as their favourite colour.